

Attempt **all** questions from **Section A** and **any four** questions from **Section B**.
All working, including rough work, must be clearly shown and must be done on the same sheet as the rest of the answer.

Omission of essential working will result in loss of marks.

The intended marks for questions or parts of questions are given in brackets [].

Mathematical tables are provided.

SECTION A (40 Marks)

Attempt **all** questions from this Section.

Question 1

(a) Solve the following in equation and write down the solution set: [3]

$$6x - 4 < 9x + 2 \leq 7x + 8, x \in W$$

Represent the solution on a real number line.

Ans. The given inequality is:

$$6x - 4 < 9x + 2 \leq 7x + 8$$

which forms two cases that are:

$$\text{Case 1: } 9x + 2 > 6x - 4$$

$$\text{Case 2: } 9x + 2 \leq 7x + 8$$

Solving the case 1, we have

$$9x + 2 > 6x - 4$$

$$\Rightarrow 9x - 6x > -4 - 2$$

$$\Rightarrow 3x > -6$$

$$\Rightarrow x > \frac{-6}{3}$$

$$\therefore x > -2$$

Solving the case 2, we get

$$9x + 2 \leq 7x + 8$$

$$\Rightarrow 9x - 7x \leq 8 - 2$$

$$\Rightarrow 2x \leq 6$$

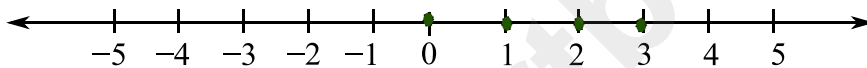
$$\Rightarrow x \leq \frac{6}{2}$$

$$\therefore x \leq 3$$

So, we get $x > -2$ and $x \leq 3$

$$\Rightarrow -2 < x \leq 3$$

Since $x \in \mathbb{w}$, Therefore, $x = \{0, 1, 2, 3\}$



(b) A man invests Rs. 3200 in shares of a company which is paying 5% dividend. If Rs. 200 shares are available at a discount of 20%. Find: [3]

(i) Number of shares he purchases.

(ii) His annual income.

Ans. Given,

Total amount of investment = Rs. 3200

Dividend (%) = 5%

Face value = Rs. 200

Discount offered (%) = 20%

Market Value of share = 200 - 20% of 200

$$= 200 - 40$$

$$= \text{Rs. } 160$$

We know that, Numbers of share = $\frac{\text{Investment}}{\text{Market value}}$

$$= \frac{3200}{160} = 20 \text{ shares}$$

Also, Annual Income = $\frac{\text{Number of share} \times \text{Dividend percent} \times \text{Face value}}{100}$

$$= \frac{20 \times 5 \times 200}{100}$$

$$= \text{Rs.}200$$

Hence, the total number of shares purchased is 20 and the annual income is Rs. 200

(c) In class of 50 students, marks obtained by the students a class test (out of 10) are given below,

Marks	1	2	3	4	5	6	7	8	9	10
Number of students	3	5	6	7	6	12	5	3	2	1

Calculate the following for the given distribution: [4]

(i) Median

(ii) Mode

Ans. Let the marks obtained be represented by x and the number of students be represented by f

Then, we can arrange the data as:

Marks(x)	Number of students(f)	(fx)
1	3	3
2	5	10
3	6	18
4	7	28
5	6	30
6	2	12
7	5	35
8	3	24
9	12	108
10	1	10
Total	$\sum f = 50$	$\sum fx = 278$

i. We know, Mean = $\frac{\sum fx}{\sum f}$

$$= \frac{278}{50} = 5.56$$

ii. Mode = Class with highest frequency

Here in the above table, we see 12 is the highest frequency

Hence, Mode = 9

Question 2

(a) Using the factor theorem, show that $(x + 2)$ is a factor of $x^3 + x^2 - 4x - 4$, Hence, factorise the polynomial completely. [3]

Ans. Let's take the given polynomial be $P(x)$.

$$\text{We have } P(x) = x^3 + x^2 - 4x - 4$$

According to question, $(x+2)$ is a factor of given polynomial

We know that, under factor theorem, $x+a$ is a factor of $P(x)$ only if $P(a) = 0$

So, to prove that, we substitute the value of x by 2

$$P(2) = 2^3 + 2^2 - 4 \times 2 - 4$$

$$P(2) = 8 + 4 - 8 - 4$$

$$P(2) = 0$$

Therefore, $x+2$ is a factor of $P(x)$

Now, factorising the polynomial, we get

$$x^3 + x^2 - 4x - 4$$

$$= x^3 - 4x + x^2 - 4$$

$$= x(x^2 - 4) + 1(x^2 - 4) \quad [\because (a^2 - b^2) = (a + b)(a - b)]$$

$$= (x^2 - 4)(x + 1)$$

$$= (x + 2)(x - 2)(x + 1)$$

(b) Evaluate:

[3]

$$\sin^2 34^\circ + \sin^2 56^\circ + 2 \tan 18^\circ \tan 72^\circ - \cot^2 30^\circ$$

Ans. Given,

$$\sin^2 34^\circ + \sin^2 56^\circ + 2 \tan 18^\circ \tan 72^\circ - \cot^2 30^\circ$$

$$= \sin^2 34^\circ + \sin^2 (90^\circ - 34^\circ) + 2 \tan 18^\circ \tan (90^\circ - 18^\circ) - \cot^2 30^\circ$$

$$= \sin^2 34^\circ + \cos^2 34^\circ + 2 \tan 18^\circ \cot 18^\circ - \cot^2 30^\circ$$

$$= (\sin^2 34^\circ + \cos^2 34^\circ) + 2 \tan 18^\circ \times \frac{1}{\tan 18^\circ} - \cot^2 30^\circ$$

$$= 1 + 2 \times 1 - (\sqrt{3})^2$$

$$= 3 - 3$$

$$= 0$$

(c) In an Arithmetic Progression (A.P.) the third and fifth terms are 6 and 10 respectively, Find the:[4]

(i) First term

(ii) Common difference

(iii) Sum of the first 12 terms

Ans.

Let the first term of A.P be 'a' and common difference be 'd'.

Then using formula $a_n = a + (n-1)d$ to get n^{th} term, we get

$$a_3 = a + (3-1)d$$

$$\Rightarrow 6 = a + 2d \dots \dots \dots (i)$$

[Given: Third term is 6 and fifth term is 10]

Also,

$$a_5 = a + (5-1)d$$

$$\Rightarrow 10 = a + 4d \dots \dots \dots (ii)$$

Now, solving (i) and (ii) simultaneously, we get

$$a + 2d - a - 4d = 6 - 10$$

$$\Rightarrow -2d = -4$$

$$\therefore d = 2$$

Putting value of d in (i), we get

$$a + 2 \times 2 = 6$$

$$\Rightarrow a + 4 = 6$$

$$\therefore a = 2$$

We know that, the sum of first n terms = $\frac{n}{2}[2a+(n-1)d]$

So, the sum of first 12 terms $S_{12} = \frac{12}{2}[2(2)+(12-1)2]$
 $= 6(4 + 11 \times 2)$
 $= 6(4 + 22)$
 $= 6 \times 26$
 $= 156$

Question 3

(a) Simplify: [3]

$$\sin A \begin{bmatrix} \sin A & \sin A \\ \cos A & -\cos A \end{bmatrix} + \cos A \begin{bmatrix} \cos A & \cos A \\ -\sin A & \sin A \end{bmatrix}$$

Ans.

$$\sin A \begin{bmatrix} \sin A & \sin A \\ \cos A & -\cos A \end{bmatrix} + \cos A \begin{bmatrix} \cos A & \cos A \\ -\sin A & \sin A \end{bmatrix}$$

$$= \begin{bmatrix} \sin^2 A & \sin^2 A \\ \sin A \cdot \cos A & -\cos A \cdot \sin A \end{bmatrix} + \begin{bmatrix} \cos^2 A & \cos^2 A \\ -\sin A \cdot \cos A & \cos A \cdot \sin A \end{bmatrix}$$

$$= \begin{bmatrix} \sin^2 A + \cos^2 A & \sin^2 A + \cos^2 A \\ \sin A \cdot \cos A + (-\sin A \cdot \cos A) & -\cos A \cdot \sin A + \cos A \cdot \sin A \end{bmatrix}$$

$$= \begin{bmatrix} 1 & 1 \\ \sin A \cdot \cos A - \sin A \cdot \cos A & -\cos A \cdot \sin A + \cos A \cdot \sin A \end{bmatrix} [\because \sin^2 A + \cos^2 A = 1]$$

$$= \begin{bmatrix} 1 & 1 \\ 0 & 0 \end{bmatrix}$$

(b) M and N are two points on the X axis and Y axis respectively. P(4, 3) divides the line segment MN in the ratio 3 : 4. Find: [3]

(i) The coordinates of M and N

(ii) Slope of the line MN.

Ans.

Let the co ordinates of M and N be (a,0) and (0,b) on x-axis and y- axis respectively

We know that,

The co ordinates of the point which divides the line segment joining (x_1, y_1) and (x_2, y_2)

internally in the ratio m:n is $\left(\frac{mx_2 + nx_1}{m+n}, \frac{my_2 + ny_1}{m+n} \right)$

According to question, P(4,3) divides the line joining M and N internally in the ratio 3:4,

Thus, using the above formula, we get

$$\left(\frac{4a}{7}, \frac{3b}{7} \right) = (4, 3)$$

So,

$$\frac{4a}{7} = 4$$

$$\Rightarrow a = \frac{4 \times 7}{4}$$

$$\therefore a = 7$$

And

$$\frac{3b}{7} = 3$$

$$\Rightarrow b = \frac{3 \times 7}{3}$$

$$\therefore b = 7$$

Therefore, the required coordinates of M and N are (7,0) and (0,7)

Now,

M(7,0) and N(0,7)

We know, slope of the line = $\frac{y_2 - y_1}{x_2 - x_1}$

Therefore, Slope of line MN = $\frac{7-0}{0-7} = \frac{7}{-7} = -1$

(c) A solid metallic sphere of radius 6 cm is melted and made into a solid cylinder of height 18cm. Find the: [4]

(i) Radius of the cylinder

(ii) Curved surface area of the cylinder

Take $\pi = 3.1$

Ans.

(i) Given, radius of metallic sphere(r) = 6cm

We know, volume of sphere = $\frac{4}{3}\pi r^3$

\therefore Volume of metallic sphere = $\frac{4}{3}\pi(6)^3$

Let r_1 be radius of the cylinder

Height of the cylinder (h) = 18cm

We know, volume of cylinder = $\pi r^2 h$

\therefore Volume of given cylinder = $\pi r_1^2 \times 18$

Now, according to question,

Volume of sphere = Volume of cylinder

$$\Rightarrow \frac{4}{3}\pi(6)^3 = \pi r_1^2 \times 18$$

$$\Rightarrow \frac{4}{3} \times 216 = 18r_1^2$$

$$\Rightarrow \frac{4 \times 216}{3 \times 18} = r_1^2$$

$$\Rightarrow r_1^2 = 16$$

$$\therefore r_1 = 4$$

Hence, the radius of the cylinder is 4cm

(ii.) Height of cylinder (h) = 18 cm and radius(r) = 4cm

So, The curved surface area of cylinder = $2\pi rh$

$$= 2 \times 3.1 \times 4 \times 18$$

$$= 446.4$$

Question 4

(a) The following numbers, $K + 1$, $3K - 9$, $2K - 5$ and $K+3$ are in proportion. Find K. [3]

Ans. Given that, $K + 1$, $3K - 9$, $2K - 5$ and $K+3$ are in proportion.

$$\therefore \frac{K+1}{3K-9} = \frac{2K-5}{K+3}$$

$$\Rightarrow (K+1)(K+3) = (2K-5)(3K-9)$$

$$\Rightarrow K^2 + 3K + K + 3 = 6K^2 - 18K - 15K + 45$$

$$\Rightarrow K^2 + 4K + 3 = 6K^2 - 33K + 45$$

$$\Rightarrow K^2 + 4K + 3 - 6K^2 + 33K - 45 = 0$$

$$\Rightarrow -5K^2 + 37K - 42 = 0$$

$$\Rightarrow (K-6)(5K+7) = 0$$

$$\therefore K = 6 \text{ or } \frac{7}{5}$$

(b) Solve for x the quadratic equation $x^2 - x - 30 = 0$. Give your answer correct to three significant figures. [3]

Ans.

Given equation, $x^2 - x - 30 = 0$

Comparing it with the quadratic equation $ax^2 + bx + c = 0$, we get

$a = 1$, $b = -1$ and $c = -30$

$$\begin{aligned}\therefore b^2 - 4ac &= (-1)^2 - 4 \times 1 \times (-30) \\ &= 1 + 120 \\ &= 121\end{aligned}$$

Substituting this value in the formula $x = \frac{-b \pm \sqrt{b^2 - 4ac}}{2a}$

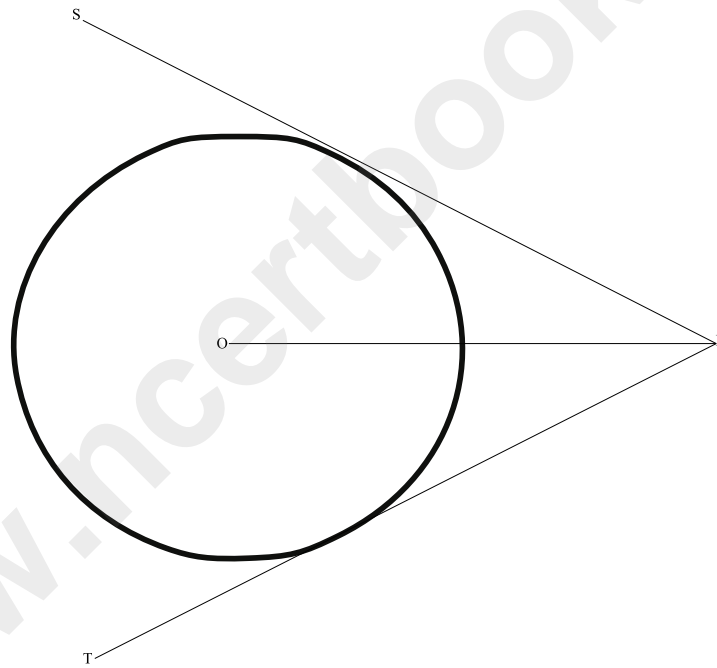
We get,

$$\begin{aligned}x &= \frac{-(-1) \pm \sqrt{121}}{2 \times 1} \\ \Rightarrow x &= \frac{1 \pm 11}{2} \\ \Rightarrow x &= \frac{1 + 11}{2} = 6 \\ \Rightarrow x &= \frac{1 - 11}{2} = -5 \\ \therefore x &= 6 \text{ or } -5\end{aligned}$$

(c) Use ruler and compass only for answering this question. Draw a circle of radius 4 cm. Mark the centre as O. Mark a point P outside the circle at a distance of 7 cm from the centre, Construct two tangents to the circle from the external point P. Measure and write down the length of any one tangent.

Ans. Steps for construction are as below:

- i. Take measure 4 cm in compass and draw a circle, with center as O.
- ii. Draw a straight line from O to P, such that $OP = 7\text{cm}$
- iii. Now find the midpoint of OP by drawing a perpendicular bisector
- iv. Mark the midpoint as X
- v. Take measure of XO in the compass and cut arcs at S and T on the Circle
- vi. Join PS and PT
- vii. Measure of PS comes out to be 5.74 cm



SECTION B (40 Marks)

Attempt any **four** questions from this Section.

Question 5

(a) There are 20 discs numbered 1 to 20. They are put in a closed box and shaken thoroughly. A disc is drawn at random from the box. [3]

Find the probability that the number on the disc is:

(i) An odd number

(ii) Divisible by 5.

(iii) A number less than 12.

Ans.

According to question,

Total number of discs numbered 1 to 20 = 20

So, the number of possible outcomes in the sample space is $n(S) = 20$

We know, Probability of an event = $\frac{\text{Number of favourable outcomes}}{\text{Total number of possible outcomes}}$

i. Let A be the event of getting an odd number

$$\therefore A = \{1, 3, 5, 7, 9, 11, 13, 15, 17, 19\}$$

$$\therefore n(A) = 10$$

Therefore, the probability of getting an odd number = $\frac{n(A)}{n(S)} = \frac{10}{20} = \frac{1}{2}$

ii. Let B be the event of getting a number divisible by 5.

$$\therefore B = \{5, 10, 15, 20\}$$

$$\therefore n(B) = 4$$

Therefore, the probability of getting a number divisible by 5 = $\frac{n(B)}{n(S)} = \frac{4}{20} = \frac{1}{5}$

iii. Let C be the event of getting a number less than 12.

$$\therefore C = \{1, 2, 3, 4, 5, 6, 7, 8, 9, 10, 11\}$$

$$\therefore n(C) = 11$$

Therefore, the probability of getting a number less than 12 = $\frac{n(C)}{n(S)} = \frac{11}{20} = \frac{11}{20}$

(b) Amit opened a recurring deposit account for 10 months. The rate of interest is 8% per annum and Amit receives Rs. 221 as interest at the time of maturity. Find the amount Amit deposited each month. [3]

Ans.

Given, Rate of interest given by bank (r) = 8%

Time period (n) = 10 months

Interest at the time of maturity = Rs.221

Let, the principle deposited every month be P

According to question,

$$P \frac{n(n+1)}{2} \times \frac{r}{12 \times 100} = 221$$

$$\Rightarrow P \frac{10(10+1)}{2} \times \frac{8}{1200} = 221$$

$$\Rightarrow P \frac{10 \times 11}{2} \times \frac{8}{1200} = 221$$

$$\Rightarrow P = \frac{221 \times 1200 \times 2}{10 \times 11 \times 8}$$

$$\therefore P = 602.72$$

Therefore, the amount deposited by Amit each month is Rs 602.72.

(c) Use a graph sheet for this question. [4]

Take 1 cm = 1 unit along both x and y axis.

(i) Plot the following points:

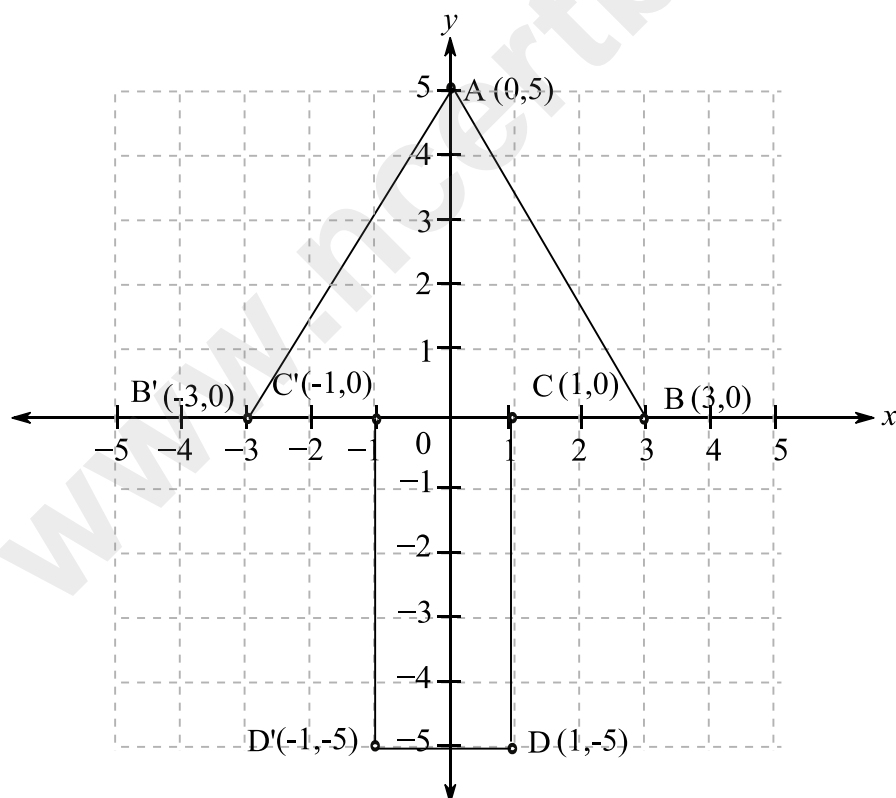
A(0,5), B(3,0), C(1,0), and D(1,-5)

(ii) Reflect the points B, C, and D on the y axis and name them as B', C' and D' respectively.

(iii) Write down the coordinates of B', C' and D'.

(iv) Join the points A, B, C, D, D', C', B', A in order and give a name to the closed figure ABCDD'C'B'.

Ans.

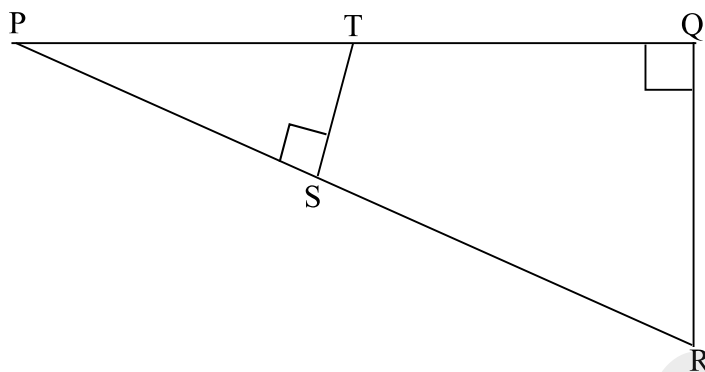


Question 6

(a) In the given figure $\angle ABC = \angle ADE = 90^\circ$, $AB = 6$ cm and $AD = 3$ cm. [3]

(i) Prove that $\triangle ABC \sim \triangle ADE$

(ii) Find Area of $\triangle ABC$: Area of quadrilateral DBCE.



Ans.

Given, $AB = 6$ cm and $AD = 3$ cm.

(i). Here, in $\triangle ABC$ and $\triangle ADE$

$$\angle ABC = \angle ADE = 90^\circ$$

And $\angle BAC = \angle DAE$ [\because Being common angle]

$\therefore \triangle ABC \sim \triangle ADE$ [Being AA similarity]

$$\text{So, } \frac{AB}{AD} = \frac{BC}{DE} = \frac{AC}{AE} = \frac{6}{3}$$

$$\therefore \frac{\text{ar}(\triangle ABC)}{\text{ar}(\triangle ADE)} = \frac{6^2}{3^2} = \frac{36}{9} = 4$$

$$\therefore \text{ar}(\triangle ABC) = 4\text{ar}(\triangle ADE) \dots \dots \dots \text{eq(1)}$$

(ii)

$$\frac{ar(\Delta ABC)}{ar(\Delta ADE)} = \frac{6^2}{3^2} = \frac{36}{9}$$

$$\frac{ar(\Delta ABC) - ar(\Delta ADE)}{ar(\Delta ADE)} = \frac{36 - 9}{9} = \frac{27}{9}$$

$$\frac{ar(\square DBCE)}{ar(\Delta ADE)} = \frac{27}{9}$$

$$\frac{ar(\square DBCE)}{\frac{1}{4}ar(\Delta ABC)} = \frac{27}{9} \dots\dots\dots \text{From equation 1}$$

$$\frac{ar(\square DBCE)}{ar(\Delta ABC)} = \frac{27}{9} \times \frac{1}{4}$$

$$\frac{ar(\square DBCE)}{ar(\Delta ABC)} = \frac{3}{4}$$

(b) The first and last term of a Geometrical Progression (G.P.) are 5 and 405 respectively. If the common ratio is 3, find: [3]

(i) 'n' the number of terms of the G.P.

(ii) Sum of the n terms.

Ans. Given first term (a) = 5, last term (l) = 405 and common difference (r) = 3.

(i). We know, formula to find nth term of a G.P is $a_n = ar^{n-1}$ or $l = ar^{n-1}$

So, according to question,

$$405 = 5 \times 3^{n-1}$$

$$\Rightarrow 3^{n-1} = 81$$

$$\Rightarrow 3^{n-1} = (3)^4$$

$$\Rightarrow n - 1 = 4$$

$$\therefore n = 5$$

(ii). We have, $n = 5$, $r = 3$ and $a = 5$

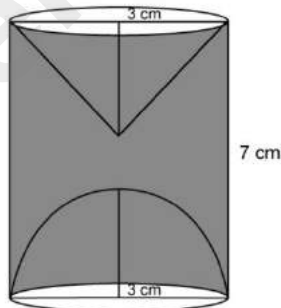
Formula for the sum of n terms of a G.P (S_n) = $\frac{a(r^n - 1)}{r - 1}$

$$\begin{aligned}\therefore \text{Sum of 5 terms } (S_5) &= \frac{5(3^5 - 1)}{2 - 1} \\ &= \frac{5(243 - 1)}{1} \\ &= 5 \times 242 = 1210\end{aligned}$$

(c) A hemispherical and a conical hole is scooped out of a solid wooden cylinder. Find the volume of the remaining solid where the measurements are as follows: The height of the solid cylinder is 7 cm, radius of each of hemisphere, cone and cylinder is 3 cm. Height of cone is 3 cm. Give your answer correct to the nearest whole number Take

$$\pi = \frac{22}{7}$$

[4]



Ans.

Given, Height of cylinder (h) = 7cm

Radius (r) = 3cm

$$\therefore \text{Volume of cylinder } (V_1) = \pi r^2 h$$

$$= \pi(3)^2 7 = \pi.63cm^3$$

Height of cone (H) = 3cm

\therefore

$$\text{Volume of cone } (V_2) = \frac{1}{3} \pi r^2 H$$

$$= \frac{1}{3} \pi (3)^2 3 = \pi 9 \text{ cm}^3$$

$$\text{Volume of hemisphere } (V_3) = \frac{2}{3} \pi r^3$$

$$= \frac{2}{3} \pi (3)^3 = \pi 18 \text{ cm}^3$$

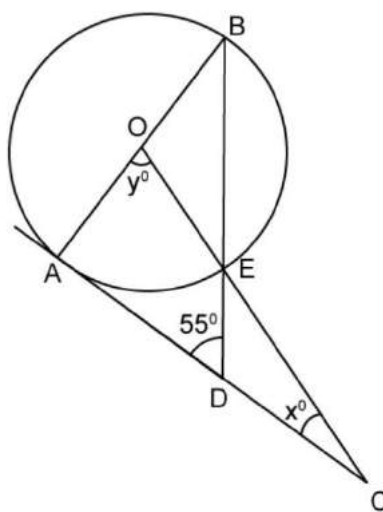
According to question,

$$\text{Volume of remaining solid} = V_1 - V_2 - V_3$$

$$\begin{aligned} \therefore \text{Remaining volume} &= \pi(63 - 9 - 18) \\ &= \frac{22}{7} \times 36 \\ &= 113.14 \text{ cm}^3 \end{aligned}$$

Question 7

(a) In the given figure AC is a tangent to the circle with centre O. If $\angle ADB = 55^\circ$, find x and y, Give reasons for your answer. [3]



Ans.

Given that, AC is a tangent to the circle with centre O

And $\angle ADB = 55^\circ$

Here, $\triangle ABD$ is a right angled triangle, so $\angle BAD = 90^\circ$

We know,

Sum of interior angles of a triangle = 180°

$$\angle ADB + \angle BAD + \angle ABD = 180^\circ$$

$$\Rightarrow 55^\circ + 90^\circ + \angle ABD = 180^\circ$$

$$\Rightarrow \angle ABD = 180^\circ - 145$$

$$\therefore \angle ABD = 35^\circ$$

Since, $\angle AOE$ is subtended at the centre and $\angle EBA$ on the circle by the arc AE,

Thus, $2\angle ABD = \angle AOE$

$$\angle AOE = 2 \times 35$$

$$\therefore y = 70^\circ$$

In $\triangle AOC$, $\angle OAC = 90^\circ$

\therefore Sum of interior angles of triangle = 180°

$$\therefore \angle OAC + \angle AOC + \angle ACO = 180^\circ$$

$$\Rightarrow 90^\circ + y + x = 180^\circ$$

$$\Rightarrow x + y = 90^\circ$$

$$\Rightarrow x - 35^\circ = 90$$

$$\therefore x = 55^\circ$$

(b) The model of a building is constructed with scale factor 1: 30. [3]

(i) If the height of the model is 80 cm, find the actual height of the building in meters.

(ii) If the actual volume of a tank at the top of the building is $27m^3$, find the volume of the tank on the top of the model.

Ans. Given scale factor is 1:30

(i). The ratio of height of the model and building is 1:30

So, if height of the model is 80cm

Then, the actual height of the building = $80 \times 30 = 2400$ cm = 24m

(i). Given, actual volume of tank = $27m^3$

Given scale factor = 1:30

Here,

$$1m = \frac{10}{3}cm$$

$$(1m)^3 = \left(\frac{10}{3}\right)^3$$

$$1m^3 = \frac{1000}{27}cm^3$$

$$\text{Then, } 27m^3 = \frac{1000}{27} \times 27 = 1000cm^3$$

Now,

$$1cm^3 = 0.001litres$$

$$\therefore 1000cm^3 = 0.001 \times 1000 = 1litres$$

Therefore, the required volume of model tank is 1litres.

(c) Given, $\begin{vmatrix} 4 & 2 \\ -1 & 1 \end{vmatrix} M = 6I$, where M is a matrix and 1 is unit matrix of order 2 x 2. [4]

(i) State the order of matrix M.

(ii) Find the matrix M

Ans.

(i) $\begin{vmatrix} 3 & 4 \\ -1 & 1 \end{vmatrix} M = 7I$

For matrix multiplication, the number of columns in first matrix should be equal to the number of rows in the other matrix and the resulting matrix will have order as below:

$$\begin{vmatrix} \times \\ m \times n \end{vmatrix} \times \begin{vmatrix} n \times q \\ \times \end{vmatrix} = \begin{vmatrix} m \times q \\ \times \end{vmatrix}$$

As given:

$$\begin{vmatrix} 3 & 4 \\ -1 & 1 \end{vmatrix} M = \begin{vmatrix} 7 & 0 \\ 0 & 7 \end{vmatrix}$$

So, the order of M should be 2 x 2

Let $M = \begin{vmatrix} p & q \\ r & s \end{vmatrix}$

$$\begin{vmatrix} 3 & 4 \\ -1 & 1 \end{vmatrix} M = \begin{vmatrix} 3 & 4 \\ -1 & 1 \end{vmatrix} \times \begin{vmatrix} p & q \\ r & s \end{vmatrix} = \begin{vmatrix} 3p+4r & 3q+4s \\ -p+r & -q+s \end{vmatrix}$$

$$\Rightarrow \begin{vmatrix} 3p+4r & 3q+4s \\ -p+r & -q+s \end{vmatrix} = \begin{vmatrix} 7 & 0 \\ 0 & 7 \end{vmatrix}$$

$$3p + 4r = 7 \dots \dots \dots eq1$$

$$-p + r = 0 \dots \dots \dots eq2$$

$$3q + 4s = 0 \dots \dots \dots eq3$$

$$-q + s = 6 \dots \dots \dots eq4$$

From eq2 we get,

$$r = p$$

Substituting the value of r in eq1

$$3r + 4r = 7$$

$$7r = 7$$

$$r = 1$$

$$\Rightarrow p = 1$$

From eq4 we get,

$$s = 7 + q$$

Substituting the value of r in eq3

$$3q + 4(7 + q) = 0$$

$$3q + 28 + 4q = 0$$

$$7q = -28$$

$$q = -4$$

$$\Rightarrow s = 7 - 4 = 3$$

Therefore, $M = \begin{vmatrix} 1 & -4 \\ 1 & 3 \end{vmatrix}$

Question 8

(a) The sum of the first three terms of an Arithmetic Progression (A.P.) is 45 and the product of the first and third term is 21. Find the first term and the common difference. [3]

Ans. Let the first term of A.P be a and the common difference be d.

So, the first three terms could be a-d, a, and a+d.

According to question,

$$a-d+a+a+d= 45$$

$$\Rightarrow 3a = 42$$

$$\therefore a = \frac{45}{3} = 15 \dots \dots \dots (1)$$

And,

$$(a-d)(a+d) = 221$$

$$\Rightarrow a^2 - d^2 = 221 \quad [\because (a+b)(a-b) = a^2 - b^2]$$

Putting value of a from (1), we get

$$\Rightarrow (15)^2 - d^2 = 221$$

$$\Rightarrow 225 - 221 = d^2$$

$$\Rightarrow d^2 = 4$$

$$\therefore d = 2$$

(b) The vertices of a $\triangle ABC$ are A(4, 6), B(-2, 4) and C(5, -5), Find: [3]

(i) Slope of BC.

(ii) Equation of a line perpendicular to BC and passing through A.

Ans. Given, the vertices of triangle ABC are A(4, 6), B(-2, 4) and C(5, -5)

We know, slope of line = $\frac{y_2 - y_1}{x_2 - x_1}$

$$\therefore \text{Slope of BC} = \frac{-5 - 4}{5 - (-2)} = \frac{-9}{7}$$

ii. Let AE be the line which is perpendicular to BC and passes through A

So, Slope of AE = $-\frac{1}{\text{Slope of BC}}$ [\because AE is perpendicular to BC]

$$\therefore \text{Slope of AE} = -\left(\frac{1}{-\frac{9}{7}}\right) = \frac{7}{9}$$

Now, we have

Slope of AE (m) = $\frac{7}{9}$ and A (4,6)

\therefore Equation of line AE

$$= y - 6 = \frac{7}{9}(x - 4)$$

$$\Rightarrow 9y - 54 = 7x - 28$$

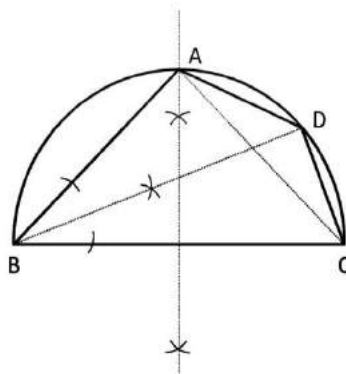
$$\Rightarrow 7x - 9y - 28 + 54 = 0$$

$$\Rightarrow 7x - 9y + 26 = 0$$

(c) Using ruler and a compass only construct a semi-circle with diameter $BC = 7\text{cm}$. Locate a point A on the circumference of the semicircle such that A is equidistant from B and C . Complete the cyclic quadrilateral $ABCD$, such that D is equidistant from AB and BC . Measure $\angle ADC$ and write it down. [4]

Ans.

- 1) Construct a semi-circle with diameter $BC = 7\text{ cm}$ i.e. radius 3.5 cm
- 2) Draw the perpendicular bisector of BC and extend it to touch the semi-circle
- 3) Mark this point as A (Since A should be equidistant from B and C)
- 4) Join AB and AC
- 5) Draw the angle bisector of angle ABC and extend it to meet the semi-circle
- 6) Mark this point as D (D is equidistant from AB and BC)
- 7) Join AD and CD
- 8) Measure of $\angle ADC$ is 135°



Question 9

(a) The data on the number of patients attending a hospital in a month are given below. Find the average (mean) number of patients attending the hospital in a month by using the shortcut method. [3]

Take the assumed mean as 35. Give your answer correct to 2 decimal places.

Number of patients	10-20	20-30	30-40	40-50	50-60	60-70
Number of days	3	5	8	7	4	3

Ans. Given, Assumed mean (A) = 35

The frequency table can be obtained using the data above:

Number of patients	Mid-point(x)	Number of days(f)	d = x - A = x - 35	fd
10-20	15	3	-20	-120
20-30	25	5	-10	-50
30-40	35=A	8	0	0
40-50	45	7	10	70
50-60	55	4	20	80
60-70	65	3	35	105
		$\sum f = 30$		$\sum fd = 85$

We have formula for mean = $A + \frac{\sum fd}{\sum f}$

\therefore Mean number of patients attending the hospital in a day

$$= 35 + \frac{85}{30} = 35 + 2.833 = 37.833$$

Hence, the mean or average number of patients attending the hospital in a month

$$= 37.833 \times 30$$

$$= 1134.99$$

(b) Using properties of proportion solve for x, given. [3]

$$\frac{\sqrt{5x} - \sqrt{2x-3}}{\sqrt{5x} + \sqrt{2x-3}} = 1$$

Ans. Given, $\frac{\sqrt{5x} - \sqrt{2x-3}}{\sqrt{5x} + \sqrt{2x-3}} = 1$

Using rationalization, we get

$$\frac{\sqrt{5x} - \sqrt{2x-3}}{\sqrt{5x} + \sqrt{2x-3}} \times \frac{\sqrt{5x} - \sqrt{2x-3}}{\sqrt{5x} - \sqrt{2x-3}} = 1$$

$$\Rightarrow \frac{(\sqrt{5x})^2 - (\sqrt{2x-3})^2}{(\sqrt{5x})^2 - (\sqrt{2x-3})^2} = 1$$

$$\Rightarrow \frac{5x - 2\sqrt{5x}\sqrt{2x-3} + 2x - 3}{5x - 2x + 3} = 1$$

$$\Rightarrow 7x - 2\sqrt{5x}\sqrt{2x-3} - 3 = 1(3x + 3)$$

$$\Rightarrow 7x - 2\sqrt{5x}\sqrt{2x-3} - 3 = 3x + 3$$

$$\Rightarrow -2\sqrt{5x}\sqrt{2x-3} = -6x + 6$$

Squaring both the sides, we get

$$\left(-2\sqrt{5x}\sqrt{2x-3}\right)^2 = (-6x + 6)^2$$

$$\Rightarrow 4 \times 5x(2x-3) = 36x^2 - 72x + 36$$

$$\Rightarrow 20x(2x-3) = 36x^2 - 72x + 36$$

$$\Rightarrow 40x^2 - 60x - 36x^2 + 72x = 36$$

$$\Rightarrow 4x^2 + 12x - 36 = 0$$

$$\Rightarrow x^2 + 3x - 9 = 0$$

Comparing it with equation, $ax^2 + bx + c = 0$, we get

a=1, b= 3 and c=-9

$$\therefore b^2 - 4ac = (3)^2 - 4 \times 1 \times (-9)$$

$$= 9 + 36 = 45$$

Substituting the value in the formula $x = \frac{-b \pm \sqrt{b^2 - 4ac}}{2a}$

$$\begin{aligned} \therefore x &= \frac{-3 \pm \sqrt{45}}{2 \times 1} \\ \Rightarrow x &= \frac{-3 \pm 3\sqrt{5}}{2} \\ \Rightarrow x &= \frac{-3 \pm 3 \times 2.236}{2} \\ \Rightarrow x &= \frac{-3 \pm 6.70}{2} \\ \Rightarrow x &= \frac{-3 + 6.70}{2} \text{ or } \frac{-3 - 6.70}{2} \\ \Rightarrow x &= \frac{3.7}{2} \text{ or } -\frac{9.7}{2} \\ \therefore x &= 1.85 \text{ or } -4.85 \end{aligned}$$

(c) Suraj invests Rs. 9000 in 5%, Rs. 100 shares at Rs. 150 He sells the shares when the price of each share rises by Rs. 50. He invests the proceeds in 10% Rs. 100 shares at Rs. 120, Find:[4]

- (i) The sale proceeds**
(ii) The number of Rs. 120 shares he buys.
(iii) The change in his annual income.

Ans.

Purchase price of each share = Rs. 150

Then, number shares purchased for Rs.9000 = $\frac{9000}{150} = 60$

As the price of share increases by Rs. 50,

So,

Selling price of each share = Rs. (150 +50) = Rs.200

i. Sale proceeds shares = Rs. (200 × 60) = Rs.12000

ii. The number of shares purchased at Rs. 120 each = $\frac{12000}{120} = 100$

iii. Initially,

$$\begin{aligned}\text{Total face value of share} &= \text{Face value of each share} \times \text{numbers of share} \\ &= 100 \times 60 = \text{Rs.}6000\end{aligned}$$

Dividend = 5% of total face value

$$= \frac{5}{100} \times 6000 = \text{Rs.}300$$

After the price of share rises by Rs.50,

$$\text{Total face value of share} = 100 \times 100 = \text{Rs.} 10000$$

$$\text{And, Dividend} = 10\% \text{ of } 10000 = \frac{10}{100} \times 10000 = \text{Rs.}1000$$

Hence, the change in annual income = Rs.(1000-300) =Rs. 700

Question 10

(a) Use graph paper for this question. The marks obtained by 120 students in an English test are given below. [6]

Marks	0-10	10-20	20-30	30-40	40-50	50-60	60-70	70-80	80-90	90-100
No. of students	5	9	16	22	26	18	11	6	4	3

Draw the ogive and hence, estimate:

(i) The median marks.

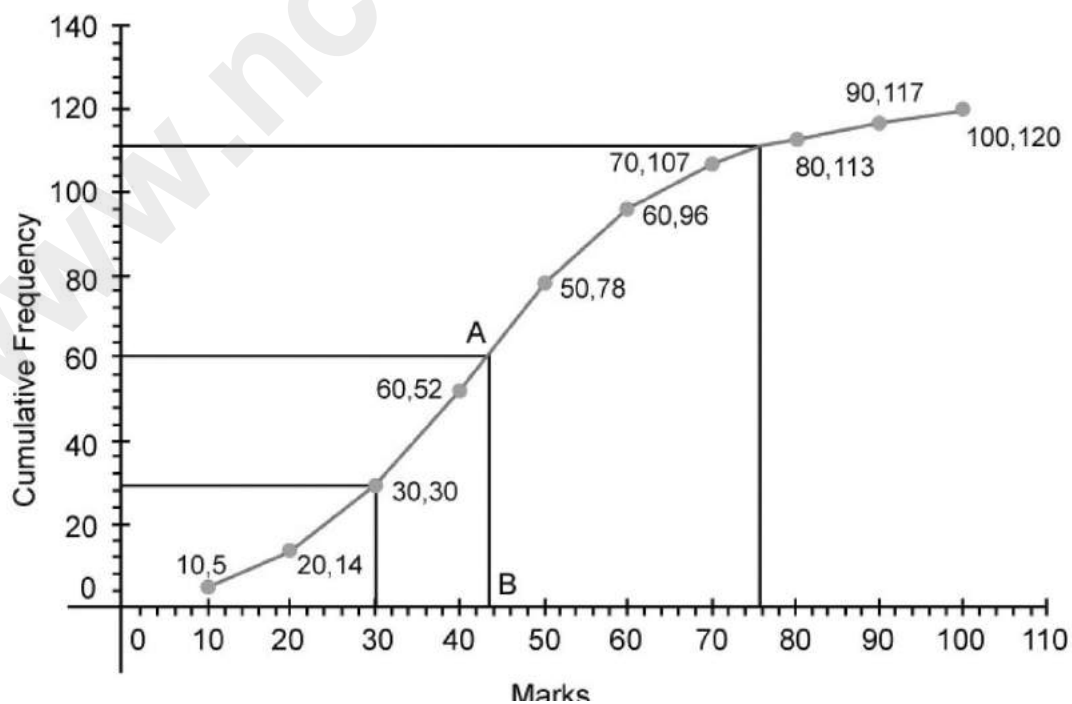
(ii) The number of students who did not pass the test if the pass percentage was 50.

(iii) The upper quartile marks.

Ans. We have to prepare a frequency table first,

Class Interval	Frequency	Cumulative frequency
0-10	5	5
10-20	9	14
20-30	16	30
30-40	22	52
40-50	26	78
50-60	18	96
60-70	11	107
70-80	6	113
80-90	4	117
90-100	3	120

Here, $n = 120$ and $\frac{n}{2} = \frac{120}{2} = 60$



i. Through mark 60, draw a line segment parallel to x-axis which meets the curve at A. From A, draw a line parallel to y-axis which meets the x-axis at point B. Therefore,

Median = 43

ii. Number of students who did not pass the test = the students who obtained less than 50 % marks = 5+9+16+22+26=78

iii. The formula for upper quartile = $\left(\frac{3n}{4}\right)^{th}$ term.

Therefore, the upper quartile marks = $\left(\frac{3 \times 120}{4}\right)^{th}$ term = 90th term = 117

(b) A man observes the angle of elevation of the top of the tower to be 45° . He walks towards it in a horizontal line through its base. On covering 20 m the angle of elevation changes to 60° . Find the height of the tower correct to 2 significant figures. [4]

Ans.

Let PQ be the height of the tower and R and S be two positions of man from where the angle of elevation was formed.

According to question, RS = 20m, $\angle QSP = 45^\circ$ and $\angle QRP = 60^\circ$

Let PQ = h and RP = x

Then, in $\triangle QSP$,

$$\tan 45^\circ = \frac{PQ}{SP}$$

$$\Rightarrow \tan 45^\circ = \frac{h}{20+x} \quad [\because \text{Being right angled triangle \& } \tan 45^\circ = 1]$$

$$\Rightarrow 20+x = h$$

$$\Rightarrow x = h - 20$$

Similarly, in ΔPQR

$$\begin{aligned}\tan 60^\circ &= \frac{PQ}{RP} \\ \Rightarrow \sqrt{3} &= \frac{h}{x} \\ \Rightarrow x &= \frac{h}{\sqrt{3}}\end{aligned}$$

Now, we can write, $h - 20 = \frac{h}{\sqrt{3}}$ [Combining the above equations]

$$\begin{aligned}\Rightarrow \sqrt{3}(h - 20) &= h \\ \Rightarrow \sqrt{3}h - 20\sqrt{3} &= h \\ \Rightarrow \sqrt{3}h - h &= 20\sqrt{3} \\ \Rightarrow h(\sqrt{3} - 1) &= 20\sqrt{3} \\ \Rightarrow h &= \frac{20\sqrt{3}}{(\sqrt{3} - 1)} \\ \therefore h &= 47.32\end{aligned}$$

Hence, the height of the tower is 47.32m.

Question 11

(a) Using the Remainder Theorem find the remainders obtained when $x^3 + (kx + 8)x + k$ is divided by $x + 1$ and $x - 2$. Hence find k if the sum of the two remainders is 1. [3]

Ans.

Let $P(x)$ be a polynomial

$$\text{So, we have } P(x) = x^3 + (kx + 8)x + k$$

When $P(x)$ is divided by $(x+1)$ and $(x-2)$, the remainder is $P(-1)$ and $P(2)$ respectively.

$$\begin{aligned}
 \text{Now, } P(-1) &= (-1)^3 + [k(-1) + 8] - 1 + k \\
 &= -1 + (k - 8) + k \\
 &= 2k - 9
 \end{aligned}$$

$$\begin{aligned}
 \text{And, } P(2) &= (2)^3 + [k(2) + 8]2 + k \\
 &= 8 + (2k + 8)2 + k \\
 &= 8 + 4k + 16 + k \\
 &= 5k + 24
 \end{aligned}$$

According to question, the sum of the two remainders is 1

i.e.

$$\begin{aligned}
 P(-1) + P(2) &= 1 \\
 \Rightarrow (2k-9) + (5k+24) &= 1 \\
 \Rightarrow 2k-9+5k+24 &= 1 \\
 \Rightarrow 7k+15 &= 1 \\
 \Rightarrow 7k &= -14 \\
 \therefore k &= -2
 \end{aligned}$$

(b) The product of two consecutive natural numbers which are multiples of 3 is equal to 810. Find the two numbers. [3]

Ans. Let the two consecutive natural numbers which are multiple of 3 be $3x$ and $(3x+3)$

Then, according to question,

Product of the numbers = 810

$$\begin{aligned} \Rightarrow 3x \times (3x + 3) &= 810 \\ \Rightarrow 9x^2 + 9x &= 810 \\ \Rightarrow x^2 + x &= 90 \\ \Rightarrow x^2 + x - 90 &= 0 \\ \Rightarrow x^2 + 10x - 9x + 90 &= 0 \\ \Rightarrow x(x + 10) - 9(x + 10) &= 0 \\ \Rightarrow (x + 10)(x - 9) &= 0 \\ \therefore x &= -10 \text{ or } 9 \end{aligned}$$

Taking $x=9$, we get $3x = 3 \times 9 = 27$

And $(3x+3) = (3 \times 9 + 3) = 30$

Taking $x = -10$, we get $3x = 3 \times -10 = -30$

And, $(3x+3) = [3 \times (-10) + 3] = -27$

Hence, the required numbers are 27 and 30 or -27 and -30

(c) In the given figure, ABCDE is a pentagon inscribed in a circle such that AC is a diameter and side $BC \parallel AE$. If $\angle BAC = 50^\circ$, find giving reasons: [4]

(i) $\angle ACB$

(ii) $\angle EDC$

(iii) $\angle BEC$

Hence prove that BE is also a diameter.

Ans. Given that, ABCDE is a pentagon inscribed in a circle such that AC is the diameter of circle and $BC \parallel AE$.

And, $\angle BAC = 50^\circ$

Here, $\triangle ABC$ is right angled triangle, so $\angle ABC = 90^\circ$

Now,

$$\angle ABC + \angle BAC + \angle ACB = 180^\circ$$

$$\Rightarrow 50^\circ + 90^\circ + \angle ACB = 180^\circ$$

[Sum of interior angles of triangle = 180°]

$$\Rightarrow \angle ACB = 180^\circ - 140^\circ$$

$$\therefore \angle ACB = 40^\circ$$

Since, $BC \parallel AE$

$$\therefore \angle ACB = \angle EAC = 40^\circ$$

[Being alternate angle]

Again, in $\triangle AEC$, $\angle AEC = 90^\circ$

[Sum of interior angles of triangle = 180°]

$$\angle AEC + \angle EAC + \angle ACE = 180^\circ$$

$$\Rightarrow 90^\circ + 40^\circ + \angle ACE = 180^\circ$$

$$\Rightarrow \angle ACE = 180^\circ - 130^\circ$$

$$\therefore \angle ACE = 50^\circ$$

And, $\angle BAC = 50^\circ$

Therefore, $AB \parallel CE$

[\therefore Being alternate angles made by transversal AC with lines CE & AB, equal]

Now, $\angle BAE = 50^\circ + 40^\circ = 90^\circ$

Also, since $\angle EAB$ is subtended by EB on the circle

So, BE is a diameter of the given circle.

Here, AEDC is cyclic quadrilateral

So,

$$\angle EAC + \angle EDC = 180^\circ$$

$$\Rightarrow 40^\circ + \angle EDC = 180^\circ$$

$$\therefore \angle EDC = 140^\circ$$

Now,

We see that Arc BC subtends angles $\angle BAC$ and $\angle BEC$ on the same side of the circle

Therefore,

$$\angle BAC = \angle BEC = 50^\circ$$

www.ncertbooks.net