

ICSE Paper 2009

CHEMISTRY

SECTION—I (40 Marks)

Attempt *all* questions from this Section

Question 1.

- (a) Name the gas evolved in each case (**formula is not acceptable**).
- The gas produced by the action of concentrated sulphuric acid on sodium chloride.
 - The gas produced by the action of dilute nitric acid on copper.
 - The gas produced on heating sodium nitrate.**
 - The gas that burns in oxygen with a green flame.
 - The gas that can be oxidised to sulphur.

[5]

- (b) Match the substance A to E listed below with the appropriate description in parts (i) to (v)

(A) Sulphur (B) Silver chloride (C) Hydrogen chloride (D) Copper (II) sulphate (E) Graphite.

- A non-metal which is a good conductor of electricity.
- A covalent compound which behaves like an ionic compound in aqueous solution.
- A compound which is insoluble in cold water but soluble in excess of ammonia solution.
- A pink metal which is deposited at the cathode during the electrolysis of the solution of this salt.
- A non-metal which reacts with concentrated nitric acid to form its own acid as one of the product.

[5]

- (c) For part (c) (i) - (c) (x), select the correct answer from the choices A, B, C and D which are given.

Write **only** the letter corresponding to the correct answer.

[10]

- Among the period 2 elements the one which has high electron affinity is :
(A) Lithium (B) Carbon
(C) Fluorine (D) Neon
- Among the following the one which is composed of all the three kinds of bond (ionic, covalent and coordinate bond) is :
(A) Sodium chloride (B) Ammonia
(C) Carbon tetrachloride (D) Ammonium chloride
- Which of the following statements is wrong about alkanes ?
(A) They are all saturated hydrocarbon.
(B) They can undergo addition as well as substitution reaction.
(C) They are almost non polar in nature.
(D) On complete combustion give out carbon dioxide and water.

** Answer has not given due to out of present syllabus.

- (iv) Select the acid which contains four hydrogen atoms in it.
- (A) Formic acid (B) Sulphuric acid
(C) Nitric acid (D) Acetic acid
- (v) A gas cylinder of capacity of 20 dm^3 is filled with gas X the mass of which is 10 g. When the same cylinder is filled with hydrogen gas at the same temperature and pressure the mass of the hydrogen is 2 g, hence the relative molecular mass of the gas is :
- (A) 5 (B) 10
(C) 15 (D) 20
- (vi) The aqueous solution of the following compounds which contains both ions and molecules is :
- (A) Sulphuric acid (B) Hydrochloric acid
(C) Nitric acid (D) Acetic acid
- (vii) The metal oxide which can react with acid as well as alkali is :
- (A) Silver oxide (B) Copper (II) oxide
(C) Aluminium oxide (D) Calcium oxide
- (viii) Carbon dioxide and sulphur dioxide gas can be distinguished by using : **
- (A) Moist blue litmus paper (B) Lime water
(C) Acidified potassium dichromate paper
(D) None of the above.
- (ix) The organic compound obtained as the end product of the fermentation of sugar solution is :
- (A) Methanol (B) Ethanol
(C) Ethane (D) Methanoic acid
- (x) A black colour solid which on reaction with dilute sulphuric acid forms a blue coloured solution is :
- (A) Carbon (B) Manganese (IV) oxide
(C) Lead (II) oxide (D) Copper (II) oxide
- (d) Write a fully balanced equation for each of the following cases : [5]
- (i) Red lead is warmed with concentrated hydrochloric acid.
(ii) Magnesium metal is treated with dilute hydrochloric acid.
(iii) Lead nitrate is heated in a dry test tube. **
(iv) Magnesium nitride is treated with warm water.
(v) Acetic acid is warmed with ethanol in the presence of concentrated sulphuric acid.
- (e) Find the odd one out and explain your choice (note : valency is not a criterion). [5]
- (i) $\text{Al}(\text{OH})_3$, $\text{Pb}(\text{OH})_2$, $\text{Mg}(\text{OH})_2$, $\text{Zn}(\text{OH})_2$
(ii) C_3H_8 , C_5H_{10} , C_2H_6 , CH_4
(iii) Sulphur, Phosphorus, Carbon, Iodine
(iv) Copper, Lead, Zinc, Mercury
(v) Formic acid, Nitric acid, Acetic acid, Propanoic acid.

** Answer has not given due to out of present syllabus.

(f) Identify the substances, P, Q, R, S and T in each case based on the information given below : [5]

- (i) The deliquescent salt P, turns yellow on dissolving in water, and gives a reddish brown precipitate with sodium hydroxide solution.
- (ii) The white crystalline solid Q is soluble in water. It liberates a pungent smelling gas when heated with sodium hydroxide solution.
- (iii) The pale green solid R turns reddish brown on heating. Its aqueous solution gives a white precipitate with barium chloride solution. The precipitate is insoluble in mineral acids.
- (iv) The reddish brown liquid S is dissolved in water. When Ethyne gas is passed through it, turns colourless.
- (v) The nitrate T does not leave any residue on heating.**

(g) (i) Calcium carbide is used for the artificial ripening of fruits. Actually the fruit ripens because of the heat evolved while calcium carbide reacts with moisture. During this reaction calcium hydroxide and acetylene gas is formed. If 200 cm^3 of acetylene is formed from a certain mass of calcium carbide, find the volume of oxygen required and carbon dioxide formed during the complete combustion. The combustion reaction can be represented as below :



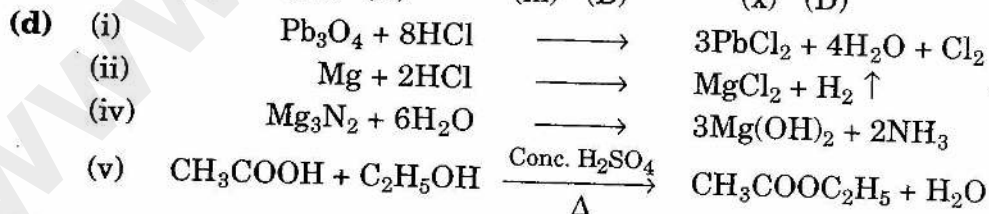
(ii) A gaseous compound of nitrogen and hydrogen contains 12.5% hydrogen by mass. Find the molecular formula of the compound if its relative molecular mass is 37.

[N = 14, H = 1].

[5]

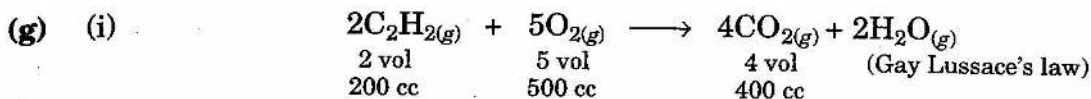
Answer.

- | | | | | | |
|---------|-----------------------|-----------|-------------------|----------|---------|
| (a) (i) | Hydrogen chloride gas | (ii) | Nitric oxide | | |
| (iv) | Ammonia | (v) | Hydrogen sulphide | | |
| (b) (i) | (E) | (ii) (C) | (iii) (B) | (iv) (D) | (v) (A) |
| (c) (i) | (C) | (ii) (D) | (iii) (B) | (iv) (D) | (v) (B) |
| (vi) | (D) | (vii) (C) | (ix) (B) | (x) (D) | |



- (e) (i) $\text{Mg}(\text{OH})_2$: It is basic while rest are amphoteric.
 - (ii) C_5H_{10} : It is an alkene while the rest are saturated hydrocarbons.
 - (iii) Carbon : It forms a very large number of compounds while rest do not.
 - (iv) Mercury : It is a liquid metal while rest are solid.
 - (v) Nitric acid : It is a mineral acid while rest are organic acids.
- (f) (i) P is Ferric chloride. (ii) Q is ammonium chloride.
 (iii) R is Ferrous sulphate. (iv) S is bromine.

** Answer has not given due to out of present syllabus.



Thus for complete combustion of 200 cc of acetylene, 500 cc of oxygen gas will be required and 400 cc of carbon dioxide will be formed.

(ii)

Elements	% by Mass	At. Mass	No. of Atoms	Simple ratio
H	12.5	1	12.5	$12.5 \div 6.25 = 2$
N	87.5	14	6.25	$6.25 \div 6.25 = 1$

∴ Empirical formula of compound is NH_2 .

Now

$$\text{Mol. wt.} = 37$$

$$\text{Empirical formula wt.} = 14 + 2 = 16$$

$$n = \frac{\text{Molecular wt.}}{\text{Empirical wt.}} = \frac{37}{16}$$

$$= 2.3 \approx 2$$

$$\text{Molecular Formula} = (\text{Empirical formula})_n$$

$$= (\text{NH}_2)_2$$

$$= \text{N}_2\text{H}_4.$$

Ans.

Section—II (40 marks)

(Answer any four questions from this section)

Question 2.

(a) Correct the following statements :

For example : 'Chlorine is a bleaching agent'.

Should read : 'Moist chlorine is a bleaching agent'.

(i) Lead bromide conducts electricity.

(ii) Copper reacts with nitric acid to produce nitrogen dioxide.

(iii) Haematite is the chief ore of aluminium.

(iv) Equal masses of all gases under identical conditions contain the same number of molecules.

(v) Hydrochloric acid is prepared in the laboratory by passing hydrogen chloride directly through water. [5]

(b) Consider the section of the periodic table given below :

Group numbers	IA	II A	III A	IV A	V A	VI A	VII A	0
	1	2	13	14	15	16	17	18
	Li		D			O	J	Ne
	A	Mg	E	Si		H	K	
	B	C		F	G			L

Note : In this table B does not represent boron

C does not represent carbon

F does not represent fluorine

H does not represent hydrogen

K does not represent potassium

You must see the position of the element in the periodic table.

- (i) Which of A and B is the cathode and which one is the anode ?
 (ii) What is the electrolyte in the tank ?
 (iii) What material is used for the cathode ? [3]
 (c) State the property of the metal being utilized in the following : [2]

Use of metal	Property
Zinc in Galvanization	
Aluminium in Thermite welding	

Answer.


- (a) (i) A complex salt.
 (ii) When silver nitrate is used, deposition of silver on cathode is not uniform because it is a strong electrolyte.
 (iii) A small current is passed for a longer time.
 (iv) $\text{Ag}^+ + e^- \longrightarrow \text{Ag}$ (v) $\text{Ag} - e^- \longrightarrow \text{Ag}^+$
 (b) (i) A is cathode and B is anode.
 (ii) Molten fluorides.
 (iii) Graphite rods dipped in pure molten aluminium.

(c)

Use of metal	Property
Zinc in Galvanization	Zinc forms a protective layer of zinc oxide which prevents rusting of iron.
Aluminium in Thermite welding	Strong affinity for oxygen.

Question 4.

- (a) (i) A gas cylinder contains 24×10^{24} molecules of nitrogen gas. If Avogadro's number is 6×10^{23} and the relative atomic mass of nitrogen is 14, calculate :
 (i) Mass of nitrogen gas in the cylinder.
 (ii) Volume of nitrogen at STP in dm^3 .
 (ii) Commercial sodium hydroxide weighing 30g has some sodium chloride in it. The mixture on dissolving in water and subsequent treatment with excess silver nitrate solution formed a precipitate weighing 14.3 g. What is the percentage of sodium chloride in the commercial sample of sodium hydroxide ? The equation for the reaction is :



[Relative molecular mass of NaCl = 58; AgCl = 143]

- (iii) A certain gas 'X' occupies a volume of 100 cm^3 at S.T.P. and weighs 0.5 g. find its relative molecular mass. [6]

- (b) Solution A is a strong acid.
 Solution B is a weak acid.
 Solution C is a strong alkali

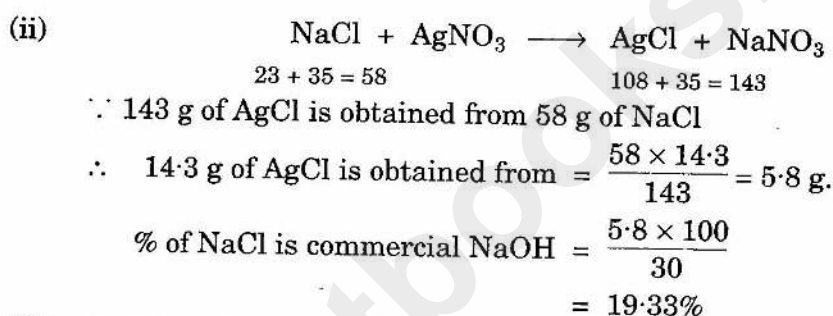
- (i) Which solution contains solute molecules in addition to water molecules ?
 (ii) Which solution will give a gelatinous white precipitate with zinc sulphate solution ? The precipitate disappears when an excess of the solution is added.

- (iii) Which solution could be a solution of glacial acetic acid ?
 (iv) Give an example of a solution which is a weak alkali.

Answer.

(a) (i) (i) 6×10^{23} molecules of nitrogen weigh 2×14 g.
 $\therefore 24 \times 10^{24}$ molecules of nitrogen weigh $= \frac{2 \times 14 \times 24 \times 10^{24}}{6 \times 10^{23}}$
 $= 28 \times 40 = 1120$ g.

(ii) $\therefore 6 \times 10^{23}$ molecules of N_2 occupy 22.4 l at STP
 $\therefore 24 \times 10^{24}$ molecules of N_2 occupy $= \frac{22.4 \times 24 \times 10^{24}}{6 \times 10^{23}}$
 $= 22.4 \times 40 = 896$ l.



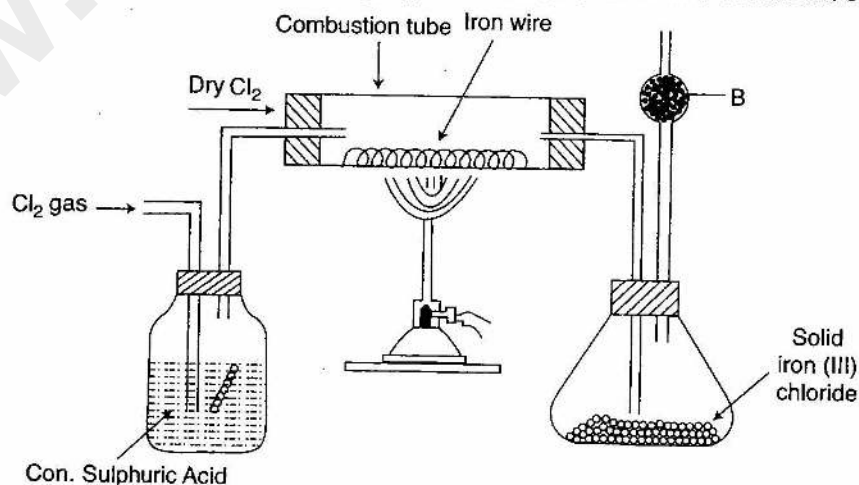
(iii) $\therefore 100$ cc of gas X at STP weighs 0.5g.
 $\therefore 22400$ cc of gas X at STP weighs $= \frac{0.5 \times 22400}{100} = 112$ g.

Molecular wt. of gas X is 112.

- (b) (i) Solution B (ii) Solution C
 (iii) Solution B (iv) Ammonium hydroxide solution.

Question 5.

(a) The diagram given below is to prepare Iron (III) chloride in the laboratory :

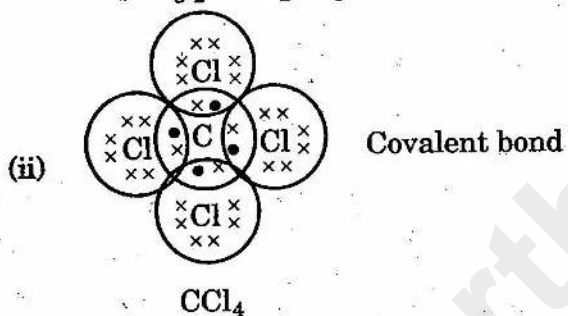


- (i) What is substance B ?
 (ii) What is the purpose of B ?
 (iii) Why is iron (III) chloride to be stored in a closed container ?
 (iv) Write the equation for the reaction between iron and chlorine.

- (b) (i) Write the equation(s) for the reaction(s) to prepare lead sulphate from lead carbonate.
- (ii) Methane is the first member of alkane, when it is treated with excess of chlorine in the presence of diffused sunlight forms carbon tetrachloride. Draw the appropriate structural formula of carbon tetrachloride and state the type of bond present in it. [4]
- (c) Aqueous solution of Nickel sulphate contains Ni^{2+} and SO_4^{2-} ions.
- (i) Which ion moves towards the cathode?
- (ii) What is the product at the anode? [2]

Answer.

- (a) (i) B is anhydrous calcium chloride.
- (ii) B acts as a drying agent and removes moisture from the flask.
- (iii) Because iron (III) chloride is a deliquescent substance.
- (iv) $2\text{Fe} + 3\text{Cl}_2 \longrightarrow 2\text{FeCl}_3$.
- (b) (i) $\text{PbCO}_3 + 2\text{HNO}_3 \longrightarrow \text{Pb}(\text{NO}_3)_2 + \text{H}_2\text{O} + \text{CO}_2$
 $\text{Pb}(\text{NO}_3)_2 + \text{Na}_2\text{SO}_4 \longrightarrow \text{PbSO}_4 + 2\text{NaNO}_3$.



- (c) (i) Ni^{2+} ions
- (ii) Oxygen gas when inert electrode is used.

Question 6.

- (a) Give one chemical test to distinguish between the following pairs of compounds :
- (i) Zinc sulphate solution and Zinc chloride solution.
- (ii) Iron (II) chloride solution and Iron (III) chloride solution.
- (iii) Calcium nitrate solution and Calcium chloride solution. [3]
- (b) Define the following terms :
- (i) Mole
- (ii) Neutralisation
- (iii) Ionization potential [3]
- (c) Fill in the blanks with the correct words from the brackets
- Generally ionic compounds exist in (i) (solid / liquid / gas) state.
- Melting and boiling points of covalent compounds are generally (ii) (low / high). The general formula for alkane is (iii) (C_nH_{2n} / $\text{C}_n\text{H}_{2n-2}$ / $\text{C}_n\text{H}_{2n+2}$). For alkynes the general formula is (iv) (C_nH_{2n} / $\text{C}_n\text{H}_{2n-2}$ / $\text{C}_n\text{H}_{2n+2}$) [4]

Answer.

- (a) (i) On addition of BaCl_2 solution, Zinc sulphate solution will give a white ppt. of BaSO_4 while Zinc chloride solution will not give any ppt with BaCl_2 solution.

- (ii) Iron II chloride gives a dirty green ppt with NaOH solution. Iron III chloride will give a reddish brown ppt with NaOH solution.
- (iii) Calcium chloride solution will give a white ppt with AgNO₃ solution while calcium nitrate solution will not give any ppt with AgNO₃ solution.
- (b) (i) **Mole** : It is the quantity of a substance which contains Avogadro's number of constituent particles.
- (ii) **Neutralisation** : It is the process by which H⁺ ions of an acid react completely with the OH⁻ ions of a base to give salt and water only.
- (iii) **Ionisation Potential** : It is the amount of energy required to remove a valence electron from an isolated gaseous atom of an element.
- (c) (i) solid, (ii) low, (iii) C_nH_{2n+2}, (iv) C_nH_{2n-2}

Question 7.

- (a) Give chemical equation for :
- (i) The laboratory preparation of methane from sodium acetate.
- (ii) The industrial preparation of methanol from water gas.
- (iii) The reaction of one mole of ethene with one mole of chlorine gas.
- (iv) The preparation of ethyne from 1, 2 - dibromoethane. [4]
- (b) State how the following conversions can be carried out :
- (i) Ethyl chloride to Ethyl alcohol. (ii) Ethyl chloride to Ethene.
- (iii) Ethene to Ethyl alcohol. (iv) Ethyl alcohol to Ethene. [4]
- (c) (i) Define isomerism.
- (ii) Give the IUPAC name of the isomer C₄H₁₀ which has a branched chain. [2]

Answer.

- (a) (i)
$$\text{CH}_3\text{COONa} + \text{NaOH} \xrightarrow[\Delta]{\text{CaO}} \text{CH}_4 + \text{Na}_2\text{CO}_3.$$
- (ii)
$$\text{CO} + \text{H}_2 + \text{H}_2 \xrightarrow[350^\circ\text{C}]{\text{ZnO, Cr}_2\text{O}_3} \text{CH}_3\text{OH}$$
- (iii)
$$\text{CH}_2 = \text{CH}_2 + \text{Cl}_2 \longrightarrow \text{CH}_3\text{Cl} \cdot \text{CH}_2\text{Cl}$$
- (iv)
$$\text{CH}_2\text{Br} \cdot \text{CH}_2\text{Br} + 2\text{KOH}_{alc} \longrightarrow \text{CH} \equiv \text{CH} + 2\text{KBr} + 2\text{H}_2\text{O}$$
- (b) (i) By treating ethyl chloride with aqueous KOH.
- (ii) By heating ethyl chloride with alcoholic KOH.
- (iii) By passing ethene into concentrated H₂SO₄ at 80°C and high pressure or by hydration of ethene.
- (iv) By heating ethyl alcohol with concentrated H₂SO₄ at 170°C.
- (c) (i) **Isomerism** : When two or more compounds having different arrangement of atoms are represented by the same molecular formula the phenomenon is called isomerism.
- (ii) IUPAC name of branched isomer of butane is 2 methyl propane.

